

INVESTICE DO ROZVOJE VZDĚLÁVÁNÍ

MNOŽINY

Barevně vyznač v jednotlivých obrázcích všechny body, které leží ve sjednocení, průniku a rozdílu množin: kruh označíme K, trojúhelník označíme T, obdélník označíme O

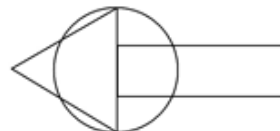
1) $K \cup O$



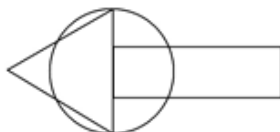
6) $T \cap O$



11) $O - T$



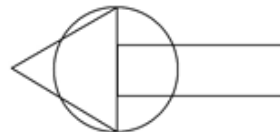
2) $K \cap T$



7) $K - O$



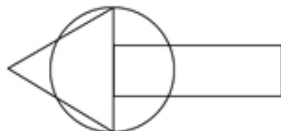
12) $T - O$



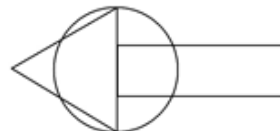
3) $T \cup O$



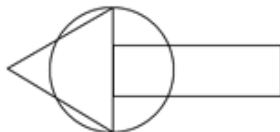
8) $O - K$



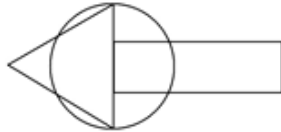
13) $T \cap K \cap O$



4) $K \cap O$



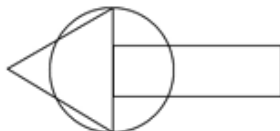
9) $K - T$



14) $T \cup K \cup O$



5) $K \cap T$



10) $T - K$

