

Množiny II

Máš tři množiny – geometrické obrazce:

čtverec - C

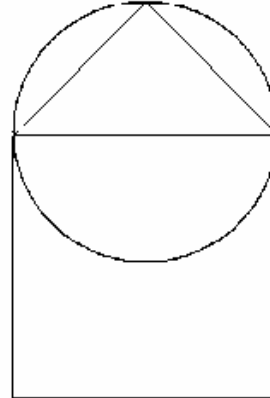
kruh - K

trojúhelník - T

Rozmístění množin je znázorněno na obrázku.

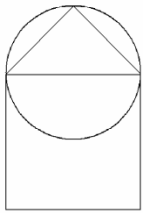
Znáznorni barevně:

- | | |
|---------------|---------------|
| 1) $C \cup K$ | 6) $K \cap T$ |
| 2) $C \cup T$ | 7) $C - K$ |
| 3) $C \cap K$ | 8) $K - C$ |
| 4) $C \cap T$ | 9) $K - T$ |
| 5) $K \cup T$ | 10) $T - K$ |

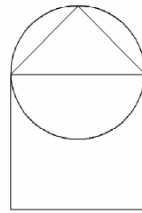


Řešení:

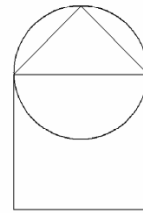
1.



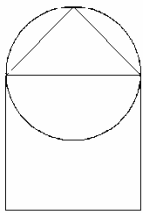
5.



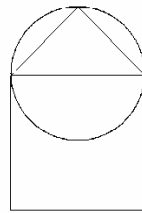
9.



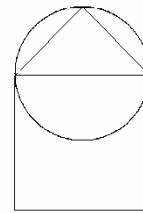
2.



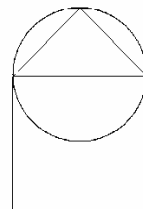
6.



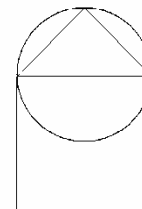
10.



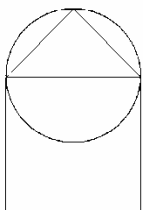
3.



7.



4.



8.

